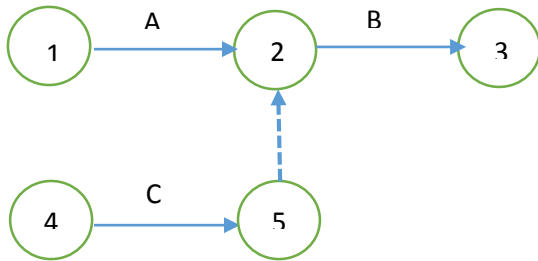


Question No 1:

Write the relationship between the activities.



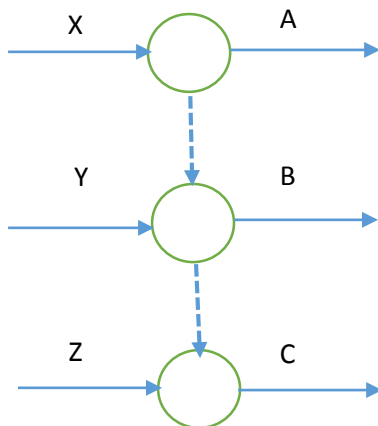
Question No 2:

Construct a network diagram for the following activity data.

Activity	Predecessor
A	-
B	-
C	A
D	B
E	D
F	C
G	E,F

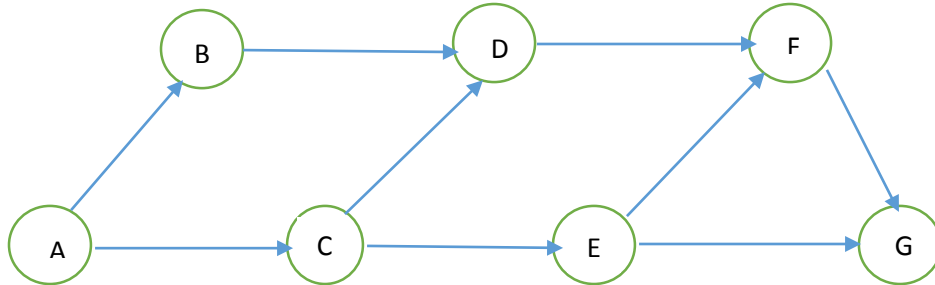
Question No 3:

Write the relationship between the activities for the following network diagram.



Question No 4:

Construct a table that shows the predecessor activities for the following network.



Question No 5:

Construct a network diagram for the following relationship.

- 1) A is predecessor of X, Y and Z.
- 2) B is predecessor of Y and Z.
- 3) C is predecessor of Z only